

2015 Australian Science Olympiad Exam

Time Allowed:

Reading Time: 10 minutes

Examination Time: 120 minutes

INSTRUCTIONS

- Attempt *ALL* questions in both sections of this paper.
- Permitted materials: a *non-programmable, non-graphical* calculator, blue and black pens, lead pencils, an eraser, and a ruler.
- Answer SECTION A on the MULTIPLE CHOICE ANSWER SHEET provided.
- Answer SECTION B in the answer booklet provided. Write your answers to each question on the pages indicated. If you need additional space use the spare pages at the back of the booklet. Write in pen and use pencil only for diagrams and graphs.
- You may attempt the questions in Section B in any order. Make sure that you label which parts are for which questions.
- **Do not write on this question paper. It will not be marked.**
- Do **not** staple the multiple choice answer sheet or the writing booklet to anything. They must be returned as they are.
- Ensure that your diagrams are clear and labelled.
- All numerical answers must have correct units.
- Marks will not be deducted for incorrect answers.

MARKS

Section A	10 multiple choice questions	10 marks
Section B	4 written answer questions	50 marks
		60 marks

SECTION A: MULTIPLE CHOICE

USE THE ANSWER SHEET PROVIDED

Throughout, take the acceleration due to gravity to be 9.8 ms^{-2} .

Question 1

A projectile is launched vertically upwards. Consider the motion of the projectile after it has been launched but before it returns to the ground. Assuming that all forces exerted by the air are negligible, the force(s) acting on the projectile is (are):

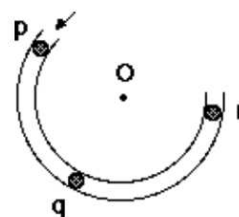
- a downward force of gravity along with a steadily decreasing upward force.
- a steadily decreasing upward force from the moment it leaves the launcher until it reaches its highest point; on the way down there is a steadily increasing downward force of gravity as the projectile gets closer to the Earth.
- an almost constant downward force of gravity along with an upward force that steadily decreases until the projectile reaches its highest point; on the way down there is only a constant downward force of gravity.
- an almost constant downward force of gravity only.
- none of the above. The projectile falls back to the ground because of its natural tendency to rest on the Earth.

Question 2

The figure shows a frictionless channel in the shape of a segment of a circle with centre at "O". The channel is attached to a frictionless horizontal table top. You are looking down at the table. Assume that all forces exerted by the air are negligible. A ball is shot at high speed into the channel at "p" and exits at "r".

Consider the following distinct forces:

- A downward force of gravity.
- A force exerted by the channel pointing from q to O.
- A force in the direction of motion.
- A force pointing from O to q.



Which of the above forces is (are) acting on the ball when it is within the frictionless channel at position "q"?

- 1 only.
- 1 and 2.
- 1 and 3.
- 1, 2, and 3.
- 1, 3, and 4.

Question 3

A book lies at rest on a table. The table is at rest on the surface of the Earth. By Newton's Third Law, the reaction force to the weight of the book is:

- the gravitational force of the Earth on the book.
- the normal force exerted by the table on the book.
- the gravitational force exerted by the Earth on the table.
- the normal force exerted by the Earth on the table.
- the gravitational force of the book on the Earth.

Question 4

Bonnie and Jake have been visiting Goulburn and were amazed to see the *aurora australis* one night. On their way home a few days later they have to drive through a massive storm, and while stopped at a section of flooded road they have a discussion about the weather and their trip. Bonnie tells Jake that the aurora they witnessed was due to high sunspot activity, producing large numbers of high energy charged particles, which experience a force in the Earth's magnetic field and are diverted towards the poles, where they collide with molecules in the atmosphere, producing the coloured light of the aurora. She mentions that there must have been a lot of sunspot activity to produce an aurora visible as far north as Goulburn. Jake, who is from Tasmania, tells Bonnie that he has seen the aurora several times before, and each time he does there is a storm within a few days later. He concludes from this observation that periods of high sunspot activity cause storms on Earth. Bonnie thinks that Jake's reasoning is flawed. Which of the following is the best statement Bonnie can make to point out the flaw in Jake's argument?

- "But Jake, I know from the atmospheric physics course that I took last semester that storms are actually the result of low-pressure systems in the Earth's atmosphere."
- "But Jake, you've considered what happens when there is high sunspot activity, but your argument ignores the influence of periods of low sunspot activity on Earth's weather systems. You really need to compare the two situations to draw any conclusions."
- "But Jake, you've assumed that just because there are storms just after sunspots, the storms are caused by the high sunspot activity."
- "But Jake, there are stormy periods in some areas but not in others while there is sunspot activity."
- Bonnie is mistaken, there is nothing wrong with Jake's argument.

Question 5

A projectile of mass M is moving directly north when it collides with and sticks to a second projectile of mass m travelling directly south. Both projectiles have the same kinetic energy, and $M \gg m$. Which of the following statements is true in the instant after the collision?

- a. The object moves north.
- b. The object moves south.
- c. The object stops dead in the air.
- d. As soon as they collide the object must move directly downwards.
- e. It depends on how hard the impact of the objects on each other is.

Question 6

A projectile is launched at an angle to the ground such that it has both a horizontal and a vertical component to its initial velocity. Assuming all forces exerted by the air are negligible, which of the following statements is true?

- a. The speed of the projectile is zero at the top of its trajectory, and the acceleration of the projectile is the same at the top of the trajectory as it is just before it hits the ground.
- b. The speed of the projectile is the same at the top of its trajectory as it is just before it hits the ground, and the acceleration of the projectile is higher just before it hits the ground than it is at the top of the trajectory.
- c. The speed of the projectile is lower at the top of its trajectory than it is just before it hits the ground, and the acceleration of the projectile is higher at the top of its trajectory than it is just before it hits the ground.
- d. The speed of the projectile is lower at the top of its trajectory than it is just before it hits the ground, and the acceleration of the projectile is the same at the top of its trajectory as it is just before it hits the ground.
- e. The speed of the projectile is higher at the top of its trajectory than it is just before it hits the ground, and the acceleration of the projectile is the same at the top of its trajectory as it is just before it hits the ground.

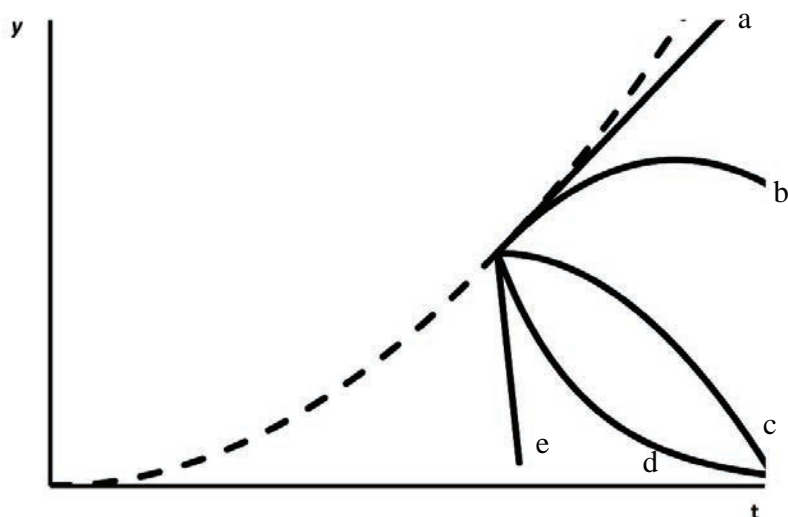
Question 7

When a screw is very tight the most effective way to loosen it is by:

- a. using a screwdriver with a fat handle and pushing down hard while turning to increase the grip.
- b. using a screwdriver with a fat handle and not pushing down too hard in case you deform the screw head.
- c. using a long screwdriver so that you are applying the force a long way from the point of contact.
- d. using a short screwdriver so that you are applying the force as close as possible to the point of contact.
- e. None of the above.

Question 8

An elevator in a four storey building is moving upward with constant acceleration. The dashed curve shows the position y of the ceiling of the elevator as a function of the time t . At the instant indicated by the set of branching (solid) curves, a bolt breaks loose and drops from the ceiling. In the absence of air resistance, which curve best represents the position of the bolt as a function of time *as seen by an observer who is not in the lift*?



Question 9


Matt is going to make a cake for Alix's birthday. The recipe says to use half a teaspoon of cinnamon, but he can't find a clean teaspoon. Instead he decides to weigh an appropriate amount on his kitchen scales. To the nearest order of magnitude, what is the mass of half a teaspoon of cinnamon?



- a. 0.01g
- b. 0.1g
- c. 1g
- d. 10g
- e. 100 g

Question 10

A large truck breaks down on the freeway and receives a push to the nearest exit by a small car as shown below.



While the car, still pushing the truck, is speeding up to get to cruising speed

- a. the amount of force with which the car pushes on the truck is equal to that with which the truck pushes back on the car.
- b. the amount of force with which the car pushes on the truck is smaller than that with which the truck pushes back on the car.
- c. the amount of force with which the car pushes on the truck is greater than that with which the truck pushes back on the car.
- d. the car's engine is running so the car pushes against the truck, but the truck's engine is not running so the truck cannot push back against the car. The truck is pushed forward simply because it is in the way of the car.
- e. neither the car nor the truck exert any force on the other. The truck is pushed forward simply because it is in the way of the car.

SECTION B: WRITTEN ANSWER QUESTIONS

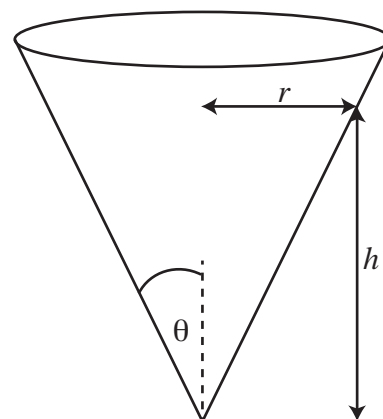
USE THE ANSWER BOOKLET PROVIDED

Note: Suggested times are given for section B as a general guide only. You may take more or less time on any question – everyone is different.

Question 11

Suggested Time: 20 min

Consider a hollow, frictionless inverted cone within which an object of mass m is free to slide. The cone has an angle of θ between its central axis and sloped side, and a radius r at height h .



- a) The object of mass m is released from rest at height h to slide inside the cone.
 - (i) What will be its speed when it reaches the bottom?
 - (ii) What assumption(s) did you make in the previous part?
- b) The object of mass m is collected and released again, but in the horizontal direction this time, with speed v . It slides in a circular path around the inside of the cone. Hence, its acceleration is $a = v^2/r$ towards the central axis of the cone.
 - (i) Draw a diagram showing the forces acting on the mass.
 - (ii) Find the magnitude of the normal force on the mass.
 - (iii) Find an expression for the height of the mass.
- c) The object of mass m continues along its circular path until it is bumped slightly so that its *speed* is unchanged, but it is now directed slightly down the cone (but still mostly around the cone). Describe and explain the motion of the mass.

Question 12

Suggested Time: 25 min

The logarithmic spiral is a curve that is seen often in nature, for example in sea shells and sunflowers. It is also known as a constant angle spiral, because it has the property that at each point on the curve, the angle between the radius (the line to the centre of the spiral) and the tangent is constant; this angle is $90^\circ - \phi$ as shown in Fig 1(a).

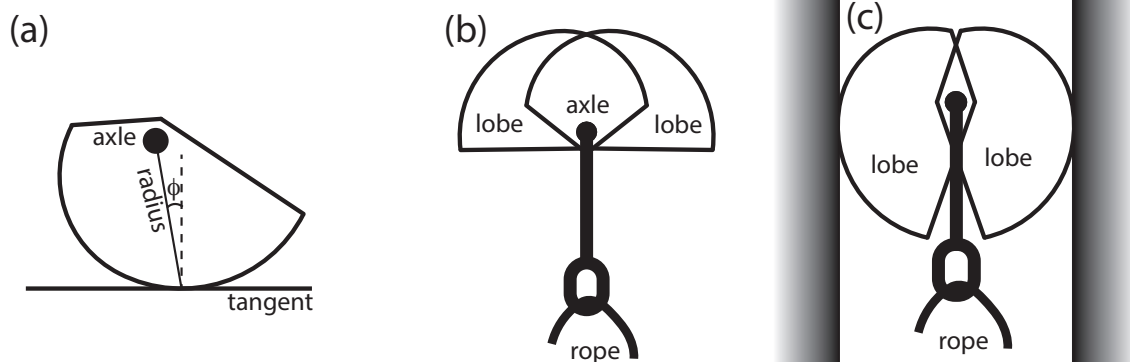


Figure 1: (a) A logarithmic spiral with angle ϕ , radius and tangent marked. (b) A spring-loaded camming device (cam) with lobes extended. (c) The same cam with lobes retracted and placed in a parallel sided crack.

The spring-loaded camming device (cam for short) is a piece of rock climbing equipment based on the logarithmic spiral and its properties. A cam's purpose is to protect the climber by limiting the distance he or she can fall.

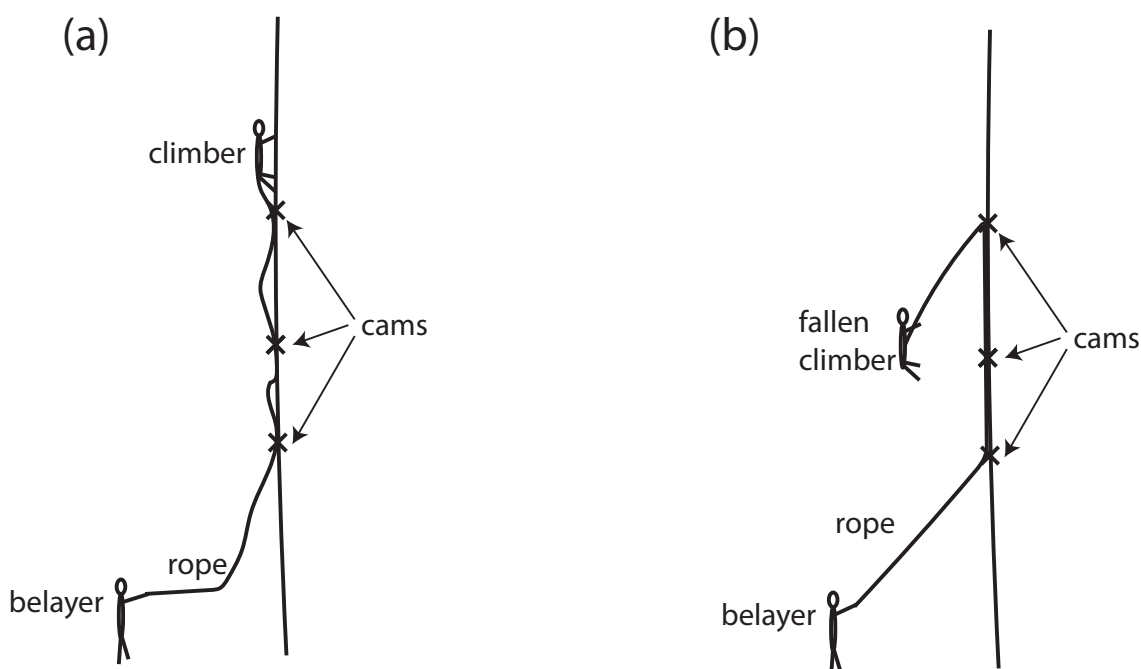


Figure 2: (a) A climber using cams for protection. (b) A climber after a fall.

A cam is comprised of two lobes, each the shape of a section of a logarithmic spiral whose centres are on a common axle; this axle is attached to the rope and hence the climber. The springs in the device restore the cam to the shape shown in Figure 1(b). The lobes can be retracted (releasing the springs) allowing the cam to be placed in a crack in the rock as shown in Figure 1(c). If the climber falls, the downward force from the fall is converted by the cam to an outward force on the rock. Friction keeps the cam in place in the crack. The frictional force has a maximum value $F_{fr} = \mu N$ where N is the normal force.

- a) Suppose a climber places a cam in a parallel-sided crack. Draw all the forces on the cam in a labelled free body diagram on p. 4 of the Answer Booklet, when
 - (i) the climber is above the cam
 - (ii) the climber has fallen and is hanging from the cam
- b) Cams rely on friction to work; it is dangerous to use them on smooth rock. What is the minimum coefficient of friction μ that the rock should have, in terms of the camming angle ϕ ?
 Note that the force exerted by the axle on each lobe must be along the line joining the axle with the point of contact of that lobe with the rock, or the lobe will rotate. You may assume the force due to the spring on each lobe is negligible, and the cam lobes do not deform the rock.
- c) What does the logarithmic spiral shape of the cam lobes mean for the cam's functionality at different amounts of retraction?
- d) As a climber climbs above a cam they may inadvertently pull the cam from side to side. Consider the springs' forces on the lobes of a cam placed in a crack and pulled from side to side.
 - (i) Describe the effect that this will have on the cam. Explain your reasoning with the help of diagrams.
 - (ii) Circle the diagram showing the **safer** crack for a climber to use on p. 5 of the Answer Booklet. Give reasons for your answer.

Question 13

Suggested Time: 25 min

One evening a house was heated by burning 10 kg of hardwood in a slow combustion heater. The fire went out at 7:30 pm. The efficiency of the heater is 68% and hardwood releases 1.9 MJ/kg of energy when it is burnt. The temperature both inside and outside the house was recorded and is shown in Figure 3.

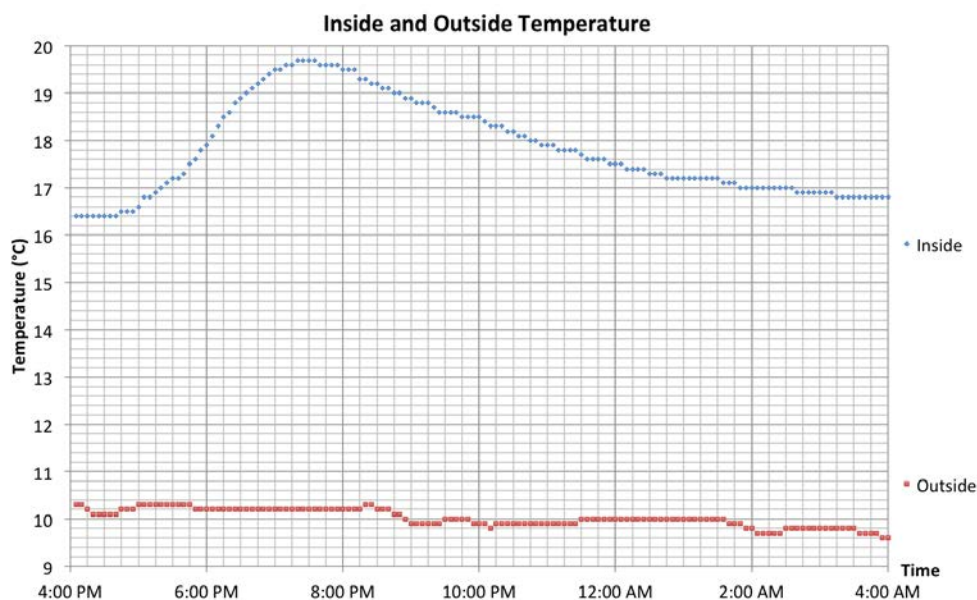


Figure 3: The temperature inside and outside the house on this evening.

- a)
 - (i) How much energy was released by burning the hardwood?
 - (ii) The total heat capacity is the amount of heat required to increase the temperature of an object by 1°C . Estimate the total heat capacity of the house.
- b) After the fire went out the house began to cool.
 - (i) Draw a straight line of best fit to the **linear** region of the graph on p. 6 of the Answer Booklet.
 - (ii) Write down an equation which describes the relationship of the line of best fit.
 - (iii) When does this relationship apply to this house?
 - (iv) Does the relationship you found using the data match your expectations about how the house would cool? Explain your answer, including what your expectations are and physical reasons for them.
- c) Use your answer to 13b to make a better estimate of the total heat capacity of the house. Justify your estimate.

Question 14

Suggested Time: 20 min

When light passes through a very narrow slit it *diffracts*. This means that the light spreads out and forms a pattern with bright and dark spots on a distant screen. Some examples of these patterns are shown below, with magnified images of the slits that generated them to the right. The wavelength of the light and the distance from the slit to the screen were kept constant in these images.

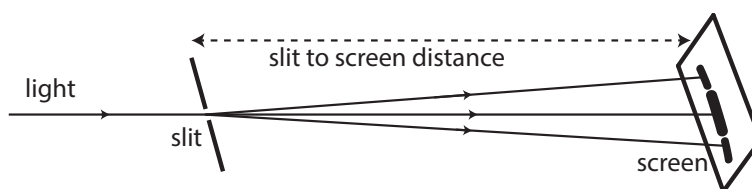
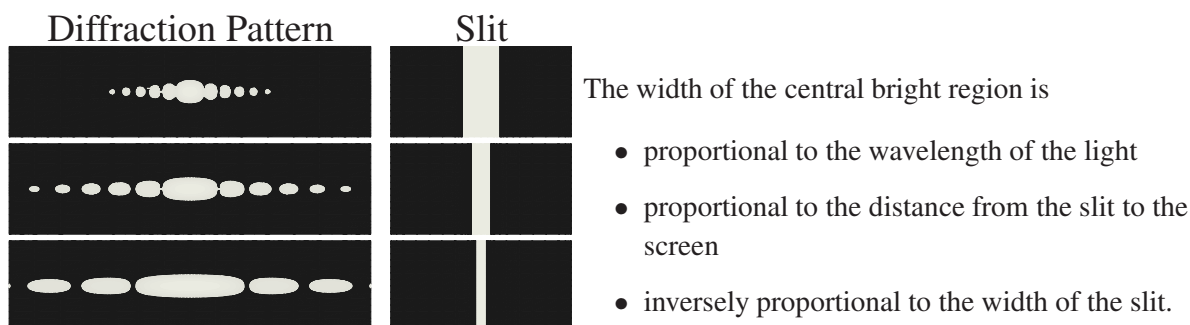



Figure 4: Light diffracting through a narrow slit.

- a) Red light of wavelength 650 nm is shone through a slit of width 3.0×10^{-4} m onto a screen 1.20 m from the slit and produces the pattern labelled “(a)” below. *Exactly one* of the slit width, wavelength or distance to screen was changed to produce the pattern labelled “(b)” below. For each possible parameter below find its required value to make pattern “(b)”:

- slit width,
- wavelength,
- distance from the slit to the screen.

Give your answers in the spaces on p. 8 of the Answer Booklet.



- A diffraction pattern from a different single slit is shown on p. 8 of the Answer Booklet. Draw a possible single slit which could have produced this pattern in the box to the right of the pattern.
- When a narrow slit is replaced by a small rectangular aperture (hole) the light spreads out in all directions and forms a pattern such as the one labelled Example on p. 8 of the Answer Booklet. Draw diagrams to fill in the blanks of diffraction patterns or aperture shapes in the table on pp. 8–9 of the Answer Booklet.
- Explain why the width of the central bright region is proportional to the distance from the slit to the screen.

Integrity of Competition

If there is evidence of collusion or other academic dishonesty, students will be disqualified. Markers' decisions are final.